

Please check the examination details below before entering your candidate information

Candidate surname

Other names

Centre Number

Candidate Number

**Pearson Edexcel International Advanced Level**

**Tuesday 9 January 2024**

Morning (Time: 1 hour 30 minutes)

Paper  
reference

**WMA11/01**

**Mathematics**

**International Advanced Subsidiary/Advanced Level  
Pure Mathematics P1**

**You must have:**

Mathematical Formulae and Statistical Tables (Yellow), calculator

Total Marks

**Candidates may use any calculator permitted by Pearson regulations. Calculators must not have the facility for symbolic algebra manipulation, differentiation and integration, or have retrievable mathematical formulae stored in them.**

### Instructions

- Use **black** ink or ball-point pen.
- **Fill in the boxes** at the top of this page with your name, centre number and candidate number.
- Answer **all** questions and ensure that your answers to parts of questions are clearly labelled.
- Answer the questions in the spaces provided – *there may be more space than you need.*
- You should show sufficient working to make your methods clear. Answers without working may not gain full credit.
- Inexact answers should be given to three significant figures unless otherwise stated.

### Information

- A booklet 'Mathematical Formulae and Statistical Tables' is provided.
- There are 10 questions in this question paper. The total mark for this paper is 75.
- The marks for **each** question are shown in brackets – *use this as a guide as to how much time to spend on each question.*

### Advice

- Read each question carefully before you start to answer it.
- Try to answer every question.
- Check your answers if you have time at the end.
- If you change your mind about an answer, cross it out and put your new answer and any working underneath.

Turn over ►

P74310A

©2024 Pearson Education Ltd.  
S:1/1/1/1/



  
Pearson

1. Find

$$\int (2x - 5)(3x + 2)(2x + 5) dx$$

writing your answer in simplest form.

(5)

DO NOT WRITE IN THIS AREA

DO NOT WRITE IN THIS AREA

DO NOT WRITE IN THIS AREA







Question 2 continued

DO NOT WRITE IN THIS AREA

DO NOT WRITE IN THIS AREA

DO NOT WRITE IN THIS AREA

Lined writing area for the answer to Question 2.

(Total for Question 2 is 5 marks)



P 7 4 3 1 0 A 0 5 2 8











5.

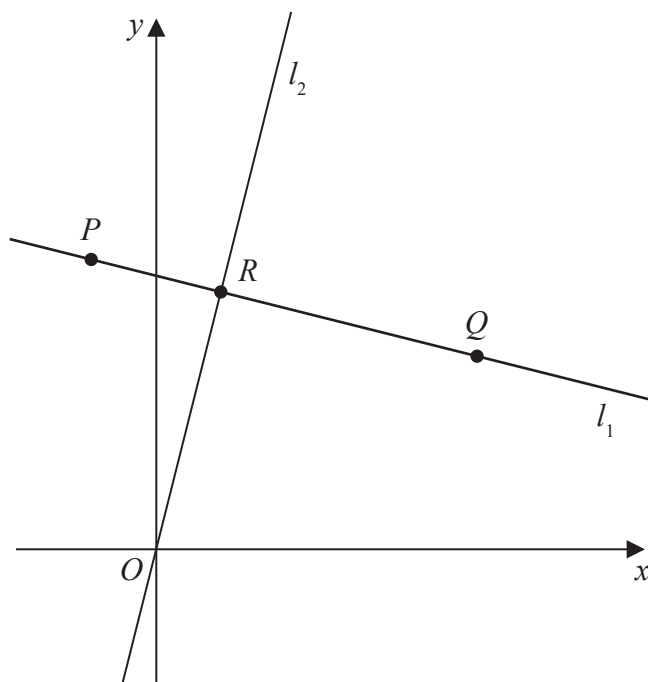


Figure 1

In this question you must show all stages of your working.

Solutions relying on calculator technology are not acceptable.

The straight line  $l_1$ , shown in Figure 1, passes through the points  $P(-2, 9)$  and  $Q(10, 6)$ .

- (a) Find the equation of  $l_1$ , giving your answer in the form  $y = mx + c$ , where  $m$  and  $c$  are constants to be found.

(3)

The straight line  $l_2$  passes through the origin  $O$  and is perpendicular to  $l_1$ .

The lines  $l_1$  and  $l_2$  meet at the point  $R$  as shown in Figure 1.

- (b) Find the coordinates of  $R$ .

(4)

- (c) Find the exact area of triangle  $OPQ$ .

(3)

---



---



---



---



---



---



---



---







Question 5 continued

DO NOT WRITE IN THIS AREA

DO NOT WRITE IN THIS AREA

DO NOT WRITE IN THIS AREA

Lined writing area consisting of multiple horizontal lines for student response.

(Total for Question 5 is 10 marks)



6.

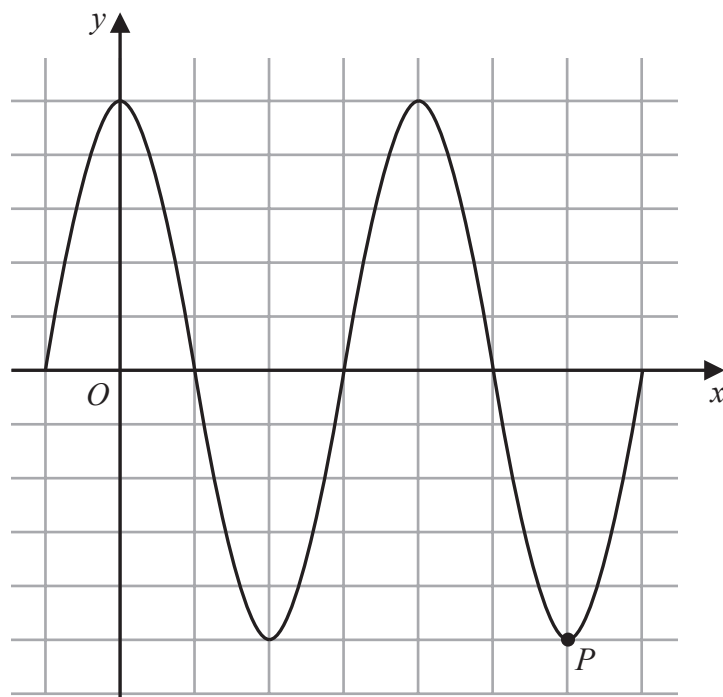


Figure 2

Figure 2 shows a plot of part of the curve  $C_1$  with equation

$$y = 5 \cos x$$

with  $x$  being measured in degrees.

The point  $P$ , shown in Figure 2, is a minimum point on  $C_1$

(a) State the coordinates of  $P$

(2)

The point  $Q$  lies on a different curve  $C_2$

Given that point  $Q$

- is a maximum point on the curve
- is the maximum point with the **smallest**  $x$  coordinate,  $x > 0$

(b) find the coordinates of  $Q$  when

(i)  $C_2$  has equation  $y = 5 \cos x - 2$

(ii)  $C_2$  has equation  $y = -5 \cos x$

(4)





7. (a) Sketch the graph of the curve  $C$  with equation

$$y = \frac{4}{x - k}$$

where  $k$  is a positive constant.

Show on your sketch

- the coordinates of any points where  $C$  cuts the coordinate axes
- the equation of the vertical asymptote to  $C$

(4)

Given that the straight line with equation  $y = 9 - x$  does not cross or touch  $C$

(b) find the range of values of  $k$ .

(5)







8.

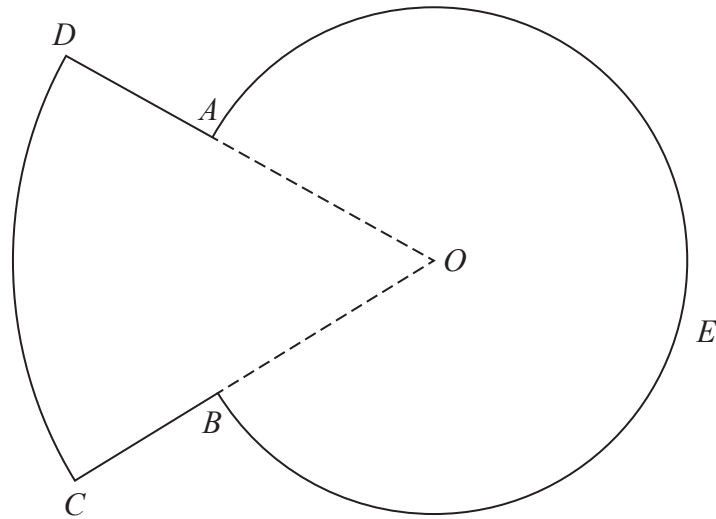


Figure 3

Figure 3 shows a sketch of the plan view of a platform.

The plan view of the platform consists of a sector  $DOC$  of a circle centre  $O$  joined to a sector  $AOBEA$  of a different circle, also with centre  $O$ .

Given that

- angle  $AOB = 0.8$  radians
- arc length  $CD = 9$  m
- $DA:AO = 3:5$

(a) show that  $AO = 7.03$  m to 3 significant figures. (3)

(b) Find the perimeter of the platform, in m, to 3 significant figures. (3)

(c) Find the total area of the platform, giving your answer in  $\text{m}^2$  to the nearest whole number. (3)

---

---

---

---

---

---

---

---

---

---

DO NOT WRITE IN THIS AREA

DO NOT WRITE IN THIS AREA

DO NOT WRITE IN THIS AREA









9. The curve  $C_1$  has equation  $y = f(x)$ .

Given that

- $f(x)$  is a quadratic expression
- $C_1$  has a maximum turning point at  $(2, 20)$
- $C_1$  passes through the origin

(a) sketch a graph of  $C_1$  showing the coordinates of any points where  $C_1$  cuts the coordinate axes,

(2)

(b) find an expression for  $f(x)$ .

(3)

The curve  $C_2$  has equation  $y = x(x^2 - 4)$

Curve  $C_1$  and  $C_2$  meet at the origin, and at the points  $P$  and  $Q$

Given that the  $x$  coordinate of the point  $P$  is negative,

(c) using algebra and showing all stages of your working, find the coordinates of  $P$

(5)





**Question 9 continued**

DO NOT WRITE IN THIS AREA

DO NOT WRITE IN THIS AREA

DO NOT WRITE IN THIS AREA











